

















































<p>What shape is  this? </p>	<p>What shape is  this? </p>	<p>What shape is  this? </p>
<p>What shape is  this? </p>	<p>What shape is  this? </p>	<p>What shape is  this? </p>
<p>What shape is  this? </p>	<p>What shape is  this? </p>	<p>What shape is  this? </p>
<p>What shape is  this? </p>	<p>What shape is  this? </p>	<p>What shape is  this? </p>
<p>What shape is  this? </p>	<p>What shape is  this? </p>	<p>What shape is  this? </p>
<p>What shape is  this? </p>	<p>What shape is  this? </p>	<p>What shape is  this? </p>
<p>What shape is  this? </p>	<p>What shape is  this? </p>	<p>What shape is  this? </p>
<p>What shape is  this? </p>	<p>What shape is  this? </p>	<p>What shape is  this? </p>

$2+5=?$



$8+6=?$



$10+5=?$



$6+9=?$



$7+6=?$



$5+5=?$



$3+8=?$



$20+6=?$



$8+4=?$



$4+3=?$



$5+0=?$



$9+2=?$



$11+6=?$



$10+10=?$



$6+3=?$



$7+5=?$



$3+8=?$



$9+5=?$



$1+8=?$



$10+1=?$



$5+2=?$



$4+6=?$






























































$7+3=?$



$8+2=?$



<p>Is it 2D or 3D</p> <p> ? </p>	<p>Is it 2D or 3D</p> <p> ? </p>	<p>Is it 2D or 3D</p> <p> ? </p>
<p>Is it 2D or 3D</p> <p> ? </p>	<p>Is it 2D or 3D</p> <p> ? </p>	<p>Is it 2D or 3D</p> <p> ? </p>
<p>Is it 2D or 3D</p> <p> ? </p>	<p>Is it 2D or 3D</p> <p> ? </p>	<p>Is it 2D or 3D</p> <p> ? </p>
<p>Is it 2D or 3D</p> <p> ? </p>	<p>Is it 2D or 3D</p> <p> ? </p>	<p>Is it 2D or 3D</p> <p> ? </p>
<p>Is it 2D or 3D</p> <p> ? </p>	<p>Is it 2D or 3D</p> <p> ? </p>	<p>Is it 2D or 3D</p> <p> ? </p>
<p>Is it 2D or 3D</p> <p> ? </p>	<p>Is it 2D or 3D</p> <p> ? </p>	<p>Is it 2D or 3D</p> <p> ? </p>
<p>Is it 2D or 3D</p> <p> ? </p>	<p>Is it 2D or 3D</p> <p> ? </p>	<p>Is it 2D or 3D</p> <p> ? </p>
<p>Is it 2D or 3D</p> <p> ? </p>	<p>Is it 2D or 3D</p> <p> ? </p>	<p>Is it 2D or 3D</p> <p> ? </p>

Is 85 odd or even ? 	Is 67 odd or even ? 	Is 99 odd or even ? 
Is 56 odd or even ? 	Is 1 odd or even ? 	Is 0 odd or even ? 
Is 2 odd or even ? 	Is 3 odd or even ? 	Is 4 odd or even ? 
Is 55 odd or even ? 	Is 64 odd or even ? 	Is 76 odd or even ? 
Is 65 odd or even ? 	Is 42 odd or even ? 	Is 68 odd or even ? 
Is 57 odd or even ? 	Is 100 odd or even ? 	Is 96 odd or even ? 
Is 49 odd or even ? 	Is 80 odd or even ? 	Is 75 odd or even ? 
Is 36 odd or even ? 	Is 43 odd or even ? 	Is 17 odd or even ? 

$5-2=?$



$8-6=?$



$10-5=?$



$9-6=?$



$7-6=?$



$5-5=?$



$8-3=?$



$20-6=?$



$8-4=?$



$4-3=?$



$5-0=?$



$9-2=?$



$11-6=?$



$10-10=?$



$6-3=?$



$7-5=?$



$9-8=?$



$9-5=?$



$8-1=?$



$10-1=?$



$5-2=?$



$6-2=?$











$7-3=?$



$8-2=?$



What comes next? 2/3/2/3/? 	What comes next? 4/5/4/5/? 	What comes next? 7/9/7/9/? 
What comes next? 1/0/1/0/? 	What comes next? 10/20/10/20/? 	What comes next? 8/6/8/6/? 
What comes next? 1/2/3/4/? 	What comes next? 14/15/16/17/? 	What comes next? 22/23/24/? 
What comes next? 56/57/58/? 	What comes next? 8/9/10/? 	What comes next? 69/70/71/? 
What comes next? 28/29/30/? 	What comes next? 11/12/13/? 	What comes next? 32/33/34/? 
What comes next? 12/13/14/? 	What comes next? 7/8/9/? 	What comes next? 2/3/4/? 
What comes next? 0/2/4/? 	What comes next? 4/6/8/? 	What comes next? 10/12/14/? 
What comes next? 55/56/57/? 	What comes next? 15/16/15/16/? 	What comes next? 7/8/7/8/? 

What is less than 1? 	What is less than 2? 	What is less than 3? 
What is less than 4? 	What is less than 5? 	What is less than 6? 
What is less than 7? 	What is less than 8? 	What is less than 9? 
What is less than 10? 	What is less than 14? 	What is less than 23? 
What is less than 37? 	What is less than 46? 	What is less than 68? 
What is less than 55? 	What is less than 71? 	What is less than 97? 
What is less than 100? 	What is less than 28? 	What is less than 12? 
What is less than 85? 	What is less than 39? 	What is less than 46? 

What is more than 1? 	What is more than 2? 	What is more than 3? 
What is more than 4? 	What is more than 5? 	What is more than 6? 
What is more than 7? 	What is more than 8? 	What is more than 9? 
What is more than 10? 	What is more than 15? 	What is more than 22? 
What is more than 35? 	What is more than 42? 	What is more than 66? 
What is more than 58? 	What is more than 70? 	What is more than 91? 
What is more than 34? 	What is more than 29? 	What is more than 11? 
What is more than 83? 	What is more than 37? 	What is more than 0? 

